

Name: \_\_\_\_\_



1 What are three things you notice about the sentence below?

Zip Tim's jacket for him!



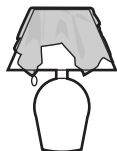
2 Circle the correct spelling for each picture.



swim

slim

skim



dip

dim

dimm

3

**whim**

a sudden wish or  
or want

(noun)

She bought that shirt on  
a **whim**.

What made her buy the shirt?

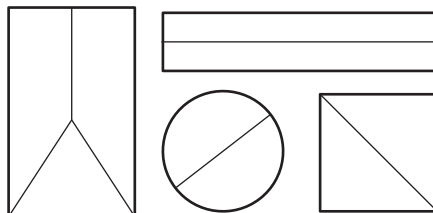


4

**done**


d		n	
d			e

5 Circle shapes that show  
halves.



**Halves** are two  
equal parts of a whole.



















6 Write the number.




26 is 20 and \_\_\_\_\_.

7 Write 2 things you notice  
about this graph.

**Colors of Balloons**

blue	     
green	     
red	     

**KEY:**  
 = 1 balloon

8

5 pigs are in the mud. Then 3 more pigs join them.  
**How many pigs are in the mud now?**



Name: \_\_\_\_\_



1 Circle the noun that owns something in each sentence.

Zip Tim's jacket for him!

Nan's lamp is too dim.

Add 's to a noun to show it owns something.

2 Sort the words by their spelling pattern.

swim

film

palm

limp

grim

lamp

-m

-mp

-lm

3

whim

a sudden wish or  
desire

(noun)



What does **whim** have  
to do with shopping?

4 Write the words in ABC order.

chat

slip

plus

a b c d e f g h i j k l m  
n o p q r s t u v w x y z

5 Use 2 numbers in each group  
to make 8.

5 1 3

$$8 = \bigcirc + \bigcirc$$

7 2 6

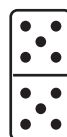
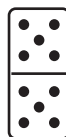
$$8 = \bigcirc + \bigcirc$$

6 Write the number in different  
forms.

21 can be written as:

\_\_\_\_\_ groups of ten and \_\_\_\_\_ one


or \_\_\_\_\_ ones.



tens	ones

7 Write the hour that is shaded.

The \_\_\_\_\_ o'clock space  
is shaded.



8

There were 6 ice pops. 4 ice pops melt.  
**How many ice pops are left?**



Name: \_\_\_\_\_



1 Add 's to each name to show ownership.

Sam\_\_\_\_\_ dog can swim fast.

Is Glen fixing Jan\_\_\_\_\_ bench?

2 Write the word that matches each picture.

him

rim

slim

trim



3

He felt a **whim** to...

**whim**

a sudden wish or  
desire

(noun)



4

**swim**



5 Double the domino dots then  
write the math fact.

$$5 + 5 = \bigcirc$$



$$2 + \bigcirc = \bigcirc$$

6 Circle the number word that  
tells how many.




twenty-five

twenty-nine

twenty-six

7 Tell what is the same about all  
the shapes.



The all have \_\_\_\_\_  
\_\_\_\_\_.

8

I have 7 letters and 3 stamps.

How many more stamps do I need for all my letters?

Draw another shape that would fit  
in that group.



Name: \_\_\_\_\_

DAY

4


1 Rewrite the sentence correctly.     **get Freds gum**

---




---

2 Circle & write the word that has the same vowel sound as the picture.

	fan	
	pet	
	bin	

	sun	
	pet	
	log	

3


~~~~~

**whim**

~~~~~

a sudden wish or desire


(noun)



What might you have a **whim** for doing today?

4 **(under-)**

“below” or “not enough”



Did you


**underbake**

the cake?


\_\_\_\_\_ + **bake** = **underbake**

prefix

5 Write how many.




+



10 more than 5 is \_\_\_\_\_.

6 Draw 2 more.










\_\_\_\_\_ is 2 more than 4.

7 There are 2 nests. 3 eggs are inside each nest.

How many eggs are there in all?



8 1 nickel is worth 5¢. Tell how much the group of nickels is worth.

= \_\_\_\_\_ ¢

Name: \_\_\_\_\_



1 Write a sentence about a friend's pet. Add 's to show that your friend owns a pet. Circle the 's.

2 Circle the noun in each sentence. Circle what kind it is.

Is the rug wet?

person place animal thing

Get it for the kid.

person place animal thing

Can a cat swim?

person place animal thing

A **noun** is a person, place, animal, or thing.

3 Draw a line to connect each word to the correct meaning.

lark

squall

chow

something you do for  
the fun of it

to eat a lot of  
food quickly

a sudden, windy storm  
that brings rain or snow

4 again

a g      n

g      i

5 Solve.


$$9 - 3 = \bigcirc$$

$$2 + 7 = \bigcirc$$

$$1 + 4 = \bigcirc$$

$$3 + 3 = \bigcirc$$

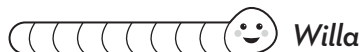
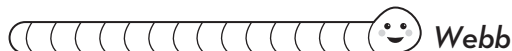
6 Write how many.



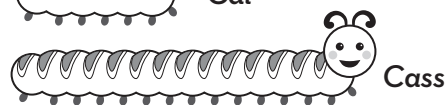
3 tens = \_\_\_\_\_

7 There are 9 butterflies.  
4 are blue and the rest are  
orange.  
**How many butterflies are  
orange?**

8 Write **shorter** or **longer** to compare the objects.



Webb is \_\_\_\_\_ than Willa.



Cal is \_\_\_\_\_ than Cass.

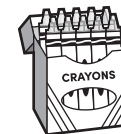


Name: \_\_\_\_\_




1 What are three things you notice about the sentence below?

Are Sandy's crayons from Target or Kohl's?



2 Circle the correct spelling for each picture.



lad

land

lamp



stand

sand

start

3


**dandy**

very good

(adjective)

Going by train is a **dandy** way to travel.

What is train travel?





4

**goes**

g	o		
		e	s

5

Draw an equal number of cookies on each plate.




Each plate has \_\_\_\_\_ cookies.

Half of 6 is \_\_\_\_\_.

6

Write the number.



$$40 + \bigcirc = 46$$

7

Use the graph to answer the questions.

Colors of Balloons

blue						
green						
red						

KEY:

= 1 balloon

There are \_\_\_\_\_ green balloons.

There are 7

\_\_\_\_\_ balloons.

8 There were 10 candles on the cake. Some more candles are added. Now there are 13 candles.  
How many candles were added to the cake?



Name: \_\_\_\_\_



1 Circle the proper nouns in each sentence.

Are Sandy's crayons from Target or Kohl's?  
Clint sent a postcard from the Grand Canyon last July.

**Proper nouns** name a specific noun.

2 Sort the words by their spelling pattern.

grand

brand

grant

plant

stank

plank

**-nt**


**-nk**

**-nd**

3

**dandy**

very good  
(adjective)



What kind of toy do you think is **dandy**?

4 Cross out ☒ antonyms. Circle pairs of synonyms.

**fast**  
**quick**

**left**  
**right**

**ill**  
**sick**

**stand**  
**sit**

**Antonyms** are opposites.  
**Synonyms** mean the same.

5 Use 2 numbers in each group to make 9.

**3 2 6**

$$9 = \bigcirc + \bigcirc$$

**5 4 7**

$$9 = \bigcirc + \bigcirc$$

6 Write the number in different forms.

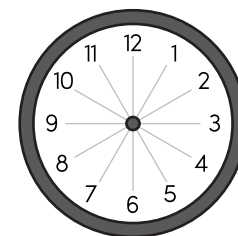
**37 can be written as:**

\_\_\_\_\_ tens \_\_\_\_\_ ones

\_\_\_\_\_ + 7

\_\_\_\_\_ ones

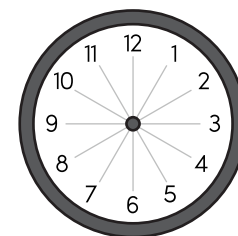
7 Draw the hour hand for each clock.



**Draw the hour hand in the 12 o'clock space.**

8

There were 11 flat soccer balls. 5 of them are pumped up.  
**How many soccer balls are still flat?**



**Draw the hour hand in the 9 o'clock space.**

Name: \_\_\_\_\_



1 Write the name of a board game to complete each sentence. Remember the capitals!

We like to play \_\_\_\_\_.

Her \_\_\_\_\_ game is missing pieces.

2 Write the word that matches each picture.

band

hand

bland


sand



3

**dandy**

very good  
(adjective)



I'm feeling **dandy** because...

4


**better**

b e      e r

b      r

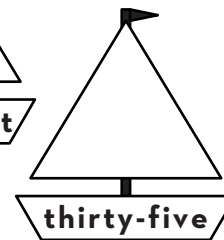
5 Double the domino dots then write the math fact.

$$\textcircled{4} + \textcircled{\quad} = \textcircled{\quad}$$

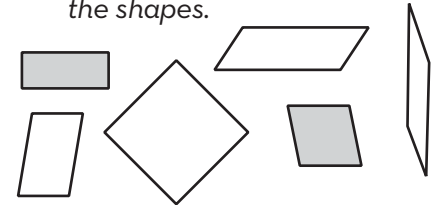


$$\textcircled{\quad} + \textcircled{\quad} = \textcircled{\quad}$$

6 Write the numeral on each sail.



7 Tell what is the same about all the shapes.



The all have \_\_\_\_\_.

8

Logan spent 12 dollars. Rory spent 9 dollars.  
How many **FEWER** dollars did Rory spend than Logan?



Draw another shape that would fit in that group.



Name: \_\_\_\_\_

DAY

9

1 Rewrite the sentence correctly. ➤ is tom's race in june

---



---

2 Circle & write the word that has the same vowel sound as the picture.

	bank	
	play	
	van	

	pie	
	yes	
	see	

3

dandy

very good  
(adjective)

What would be a **dandy** way to spend a summer day?

4 Add the prefix (under-) to each base word. Draw lines to match the words with their meaning.

sea

use

to not use enough

below the sea

5 Write how many.

10 less than 29 is \_\_\_\_\_.

6 Circle the set that has **fewer**.

---

\_\_\_\_\_ is 4 less than \_\_\_\_\_.

\_\_\_\_\_ is less than \_\_\_\_\_.

7 I camp 2 times in 1 month.  
**How many times do I camp in 2 months?**

8 1 quarter is worth 25¢. Tell how much each group of quarters is worth.

= \_\_\_\_\_ ¢

= \_\_\_\_\_ ¢

Name: \_\_\_\_\_



1 Write a sentence about a movie you like. Remember to capitalize the title! Circle the proper noun(s).

\_\_\_\_\_

\_\_\_\_\_

2 Write a name and add 's to show ownership.

I have \_\_\_\_\_ snack.

Don't crack \_\_\_\_\_ mug!

There's a frog on \_\_\_\_\_ back!

Add 's to a noun to show it owns something.

3 Draw a line to connect each word to the correct meaning.

squall

whim

lark

a sudden wish  
or desire

something you do for  
the fun of it

a sudden, windy storm  
that brings rain or snow

4 stand

s t      d

s t     

5 Solve.


$$10 - 4 = \bigcirc$$

$$2 + 2 = \bigcirc$$

$$14 - 7 = \bigcirc$$

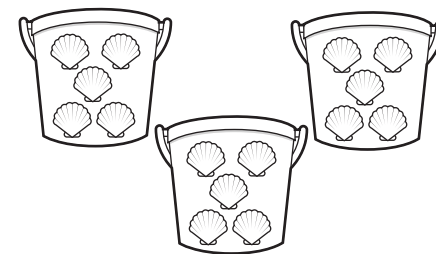
$$1 + 8 = \bigcirc$$

6 Write how many tens. Then write the number.



\_\_\_\_\_ tens = \_\_\_\_\_

7



3 groups of 5 = \_\_\_\_\_

8 There are 12 fish in the tank. 8 of the fish are red and the rest are yellow.  
How many of the fish are yellow?



3 fives = \_\_\_\_\_

5 + 5 + 5 = \_\_\_\_\_

Name: \_\_\_\_\_



1 What are three things you notice about the sentence below?

The milk spilled on the table, chairs, and floor.



2 Circle the correct spelling for each picture.



les      less      let



sets      stres      stress

3

**caress**

a gentle or loving touch

(noun)

He felt the **caress** of the the cat rubbing his leg.

What did he feel?



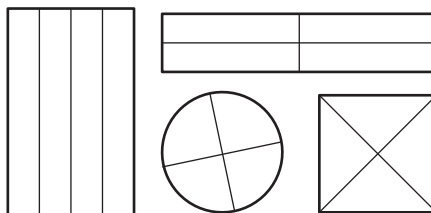
4

**guess**

g	u			
		e	s	s

5


Shade a fourth of each shape.



A **fourth** is 1 out of 4 equal parts.

6

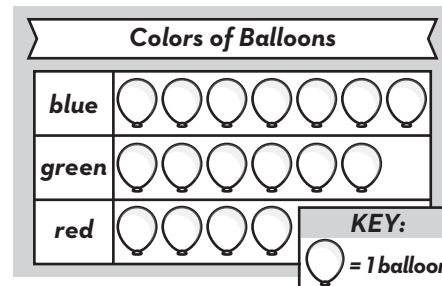
There are 30 chocolates in the big box.



There are \_\_\_\_\_ chocolates in all.

7

Use the graph to answer the questions.



There are the most

\_\_\_\_\_ balloons.

There are the fewest

\_\_\_\_\_ balloons.

8

At his party, Arlo got 12 gifts. His grandma gave him some more gifts. Now he has 15 gifts.  
How many gifts did he get from his grandma?



Name: \_\_\_\_\_



1 Circle the commas.

The milk spilled on the table, chairs, and floor.  
I might be a coach, doctor, pilot, or artist one day!

Use commas to separate items in a list.

2 Sort the words by their spelling pattern.

off

mess

bull

cliff

boss

fell

-ff

-ll

-ss

3

**caress**

a gentle or loving  
touch  
(noun)



What does **caress** have  
to do with a baby?

4 Write the words in ABC order.

less  
sniff  
yell  
fuzz


a b c d e f g h i j k l m  
n o p q r s t u v w x y z

5 Use 2 numbers in each group  
to make 10.

9 2 8

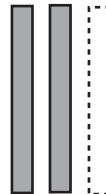
$$10 = \bigcirc + \bigcirc$$

6 3 4

$$10 = \bigcirc + \bigcirc$$


6 Draw the missing tens and  
ones.

$$45 = \bigcirc + \bigcirc$$




tens	ones

7 Write the HOUR that each  
clock shows.



:50



:20

8 13 mitts were played with at recess. Some were left outside. 9 mitts were brought inside.  
**How many mitts were left outside?**



Name: \_\_\_\_\_



1 Add commas to the sentences.

You must brush floss and visit the dentist for healthy teeth.

Is that dress white gold black or blue?

2 Write the word that matches each picture.

press

chess

dress

bless



3

**caress**

a gentle or loving  
touch


(noun)



After so many cloudy days, the **caress** of  
the sunlight felt...

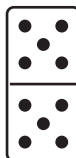

4

**both**


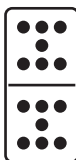


5 Find half of each total.

half of 10 = \_\_\_\_\_



half of 14 = \_\_\_\_\_



6 Circle the words that match  
the numeral.

**62**

2 tens 6 ones


6 tens 6 ones

6 tens 2 ones

6 tens 3 ones

7 Trace the sides of each shape.  
Circle the angles.

**square**



\_\_\_\_\_ **straight sides**

\_\_\_\_\_ **angles**

**hexagon**



\_\_\_\_\_ **straight sides**

\_\_\_\_\_ **angles**

8

One hill is 11 feet high. The second hill is 18 feet high.  
**How much shorter is the first hill?**



Name: \_\_\_\_\_

# DAY

# 14



1 Rewrite the sentence correctly.     can we play chess checkers or cards

---



---

2 Circle & write the word that has the same vowel sound as the picture.

	dress fizz wall	
	stuff kiss doll	


3

~~~~~

## caress

~~~~~

a gentle or loving touch  
(noun)




What is a song that **caresses** your ears when you hear it?

4

## (-ish)

"sort of" or "nearly"




I like that


## greenish


shell.

green +=
greenish
suffix

5 Subtract.


 $18 - 3 = \underline{\quad}$


 $28 - 3 = \underline{\quad}$


 $38 - 3 = \underline{\quad}$

6 Order from **least** to **greatest**.  
Compare using **greater** or **less**.

62

43

51

35

51 is \_\_\_\_\_ than 43.

7 I want to put 2 cups of milk in each class. There are 10 glasses.  
**How many cups of milk do I need to fill all the glasses?**

8 Determine the value of the group of coins. Don't forget the cent sign ¢ !








$= \underline{\hspace{2cm}}$



Name: \_\_\_\_\_



1 Write a sentence about 3 fruits you like. Circle all the commas.

2 Write the name of a movie to complete each sentence.

I've already seen \_\_\_\_\_.

She saw \_\_\_\_\_ five times!

Can we watch \_\_\_\_\_?

**Proper nouns** name a specific noun. Remember to capitalize them!

3 Draw a line to connect each word to the correct meaning.

whim

lark

dandy

something you do for  
the fun of it

a sudden wish  
or desire

very good

4

knew

		e	w
--	--	---	---

k	n		
---	---	--	--

--	--	--	--

5

Solve.

$$11 + 2 = \bigcirc$$

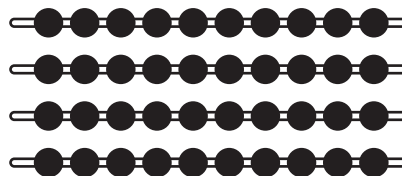
$$7 + \bigcirc = 8$$

$$17 - 3 = \bigcirc$$

$$14 - \bigcirc = 10$$

6

There are 45 beads.



Circle the beads that show  
the 4 part of the number 45.

7

There are 14 people at the  
barbecue. 6 people want hot  
dogs and the rest want  
burgers.

**How many of the people  
want burgers?**

8

Measure.

The hot dog is about as long as \_\_\_\_\_ ants.

The straw is about as long as \_\_\_\_\_ ants.



Name: \_\_\_\_\_



1 What are three things you notice about the sentence below?

Henny's eggs chipped, cracked, and finally hatched!



2 Circle the correct spelling for each picture.



face      fase      fast



spase      space      spake

3

**pace**

the speed at which  
something moves

(noun)



The traffic crept at a  
snail's **pace** and we were  
stuck on the road.

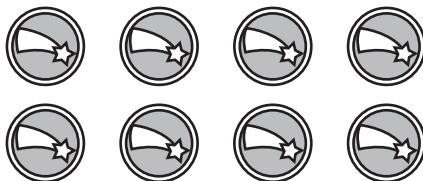
How was the traffic moving?

4

**buy**



5 Show how 4 friends can share  
8 stickers so they each get the  
same number of stickers.



Each person will get \_\_\_\_\_  
stickers.

6

7 tens - 4 tens = \_\_\_\_\_ tens

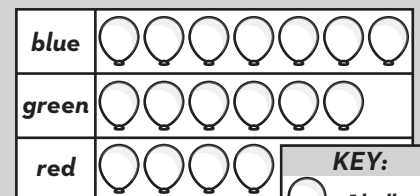
70 - 40 = \_\_\_\_\_

8 tens - 2 tens = \_\_\_\_\_ tens

80 - 20 = \_\_\_\_\_

7 Use the graph to answer the  
questions.

Colors of Balloons



KEY:

= 1 balloon

There are \_\_\_\_\_ red  
balloons.

There are \_\_\_\_\_ more green  
than red balloons.

8

Zane has 6 yellow shoe laces, 4 red shoelaces, and 6 blue shoelaces.  
How many shoelaces does he have in all?





Name: \_\_\_\_\_



1 Circle the 3 past tense verbs in each sentence.

Henny's eggs chipped, cracked, and finally hatched!

We waved and cheered when our team played.

Add **-ed** to many verbs to form the past tense.

2 Sort the words by their spelling pattern.

race

rice

price

once

place

prince

**-ace**

**-ice**

**-nce**

3

**pace**

the speed at which  
something moves

(noun)



What does **pace** have to do with  
winning a race?

4 Circle the 2 synonyms in each  
group.

**trace**

**toss**

draw

throw

sketch

find

place

fling

**Synonyms** are words that have  
about the same meaning.

5 Use 2 numbers in each group  
to make 11.


**3 8 9**

$$11 = \bigcirc + \bigcirc$$

**7 4 6**


$$11 = \bigcirc + \bigcirc$$

6 Draw ones to show **72** with  
**5 tens and some more ones.**



\_\_\_\_\_ tens \_\_\_\_\_ ones = 72



7 The clock shows only the  
HOUR HAND. Circle the  
answer that tells **about** what  
time it is.



It's a little  
after 5 o'clock.

It's between  
6 and 7.

8 There were some limes in the bowl. 12 limes were used for limeade. There are still 4 limes in the bowl.  
**How many limes were in the bowl at the start?**



It's about  
8 o'clock.

It's almost  
9 o'clock.

Name: \_\_\_\_\_



1 Add **-ed** to the end of the verbs to form the past tense. If the verb ends in **e**, just add **-d**.

I bake\_\_\_\_, clean\_\_\_\_, and wash\_\_\_\_ all day!

He close\_\_\_\_ his eyes and cross\_\_\_\_ his fingers before he wish\_\_\_\_.

2 Write the word that matches each picture.

trace

place

ace

lace



3

**pace**

the speed at which  
something moves

(noun)



I picked up my **pace** because...

4

**once**

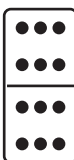
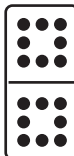
n c e

o

5 Find half of each total.

half of 16 = \_\_\_\_\_

$$16 - \bigcirc = \bigcirc$$



half of 12 = \_\_\_\_\_

$$12 - \bigcirc = \bigcirc$$

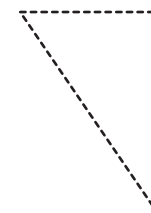
6 Write the numeral.

6 tens  
1 one

0 tens  
8 ones

7 Trace the sides of each shape.  
Circle the angles.

**triangle**



3  
straight sides

angles

**trapezoid**



straight sides

angles

8

Cole hiked 4 more miles than Kate. Kate hiked 8 miles.

**How many miles did Cole hike?**



Name: \_\_\_\_\_

# DAY 19


1 Rewrite the sentence correctly.    the rocket launchd into spase

---




---

2 Circle & write the word that has the same vowel sound as the picture.

	last	<div style="border-bottom: 1px dashed black; height: 20px; width: 100%;"></div>
	call	
	game	

	joke	<div style="border-bottom: 1px dashed black; height: 20px; width: 100%;"></div>
	boss	
	lock	

3


~~~~~

## pace

~~~~~

the speed at which something moves

(noun)

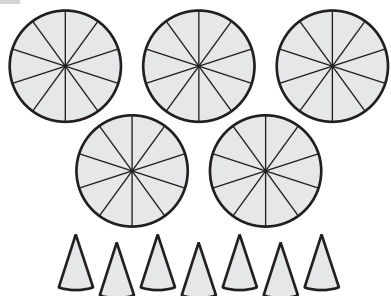


What does it mean to go at your own **pace**?

4 Add the suffix **(-ish)** to each base word. Draw lines to match the words with their meaning.

sweet_____	fool_____
sort of sweet	like a fool

5 There are 5 tens 7 ones.



30 more is \_\_\_\_\_.







6 Circle the words that correctly compare the numerals.

<div style="background-color: black; color: white; padding: 5px; width: 40px; margin: 0 auto;">49</div> <div style="border: 1px solid black; padding: 5px; width: 100%;">is greater than</div>	<div style="background-color: black; color: white; padding: 5px; width: 40px; margin: 0 auto;">77</div> <div style="border: 1px solid black; padding: 5px; width: 100%;">is less than</div>
<div style="background-color: black; color: white; padding: 5px; width: 40px; margin: 0 auto;">85</div> <div style="border: 1px solid black; padding: 5px; width: 100%;">is greater than</div>	<div style="background-color: black; color: white; padding: 5px; width: 40px; margin: 0 auto;">58</div> <div style="border: 1px solid black; padding: 5px; width: 100%;">is less than</div>


7 At the flower shop, there are 6 vases. 10 roses can fit in a vase.

**How many roses are needed to fill all the vases?**

8 Determine the value of the group of coins. Don't forget the cent sign ¢ !

= \_\_\_\_\_



Name: \_\_\_\_\_



1 Write a sentence about something you wished for. Circle the verbs.

.....

.....

2 Add commas to the sentences.

I have 3 uncles 4 aunts and 9 cousins.

Should I vote for Liz Dale Nav or June?

Do you want Coke Sprite or Crush?

Use commas to separate items in a list.

3 Draw a line to connect each word to the correct meaning.

caress

whim

dandy

very good

a gentle or  
loving touch

a sudden wish  
or desire

4 place

a c e

p l

5 Solve.

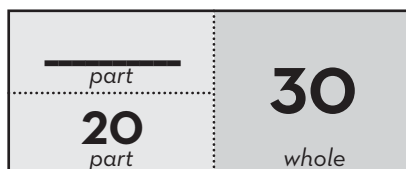
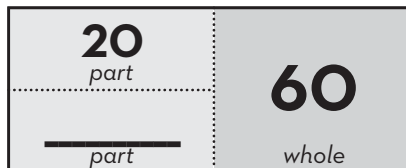
$$4 + \bigcirc = 8$$

$$17 - 7 = \bigcirc$$


$$\bigcirc - 6 = 3$$

$$10 + 10 + 10 = \bigcirc$$

6 Write the missing numbers.



7 Draw an equal number of apples on each tree.



There are \_\_\_\_\_ apples in all.

There are \_\_\_\_\_ trees.

There are \_\_\_\_\_ apples on  
each tree.

$$8 = \underline{\hspace{2cm}} + \underline{\hspace{2cm}}$$

8 The kids parked their bikes behind the school. 8 of the bikes are black.

11 of the bikes are red.

How many bikes are there in all?



Name: \_\_\_\_\_



1 What are three things you notice about the sentence below?

She broke her foot when she fell from the tree.



2 Circle the correct spelling for each picture.



noppe    nope    nop



scop    scopp    scope

3

**mope**

to act in a way that  
shows you're  
unhappy

(verb)

The boy hoped his mom  
would see him **mope** and  
decide to buy him a toy.

What is the boy doing?



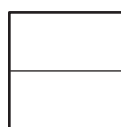
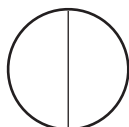

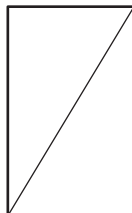
4

**carry**

c	a			y
	a			

5

Draw lines to partition each  
halved shape in fourths.



A **fourth** is 1 out of 4 equal parts.

6

**156**

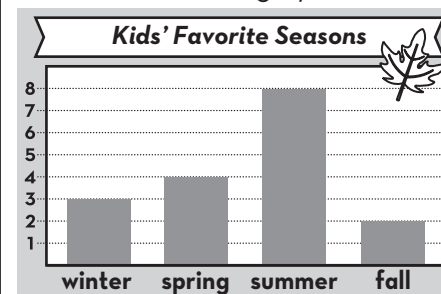
the digit  
\_\_\_\_\_ stands  
for  
1 hundred  
or 100

the digit  
\_\_\_\_\_ stands  
for  
5 tens  
or 50

the digit  
\_\_\_\_\_ stands  
for  
6 ones  
or 6

7

Write 2 things you notice  
about this bar graph.



8 Nidhi scored 17 points in the first half of the game. She scored some more points in the second half.  
In all, she scored 32 points.

**How many points did she score in the second half of the game?**





DAY  
22

She broke her foot when she fell from the tree.

Change the spelling of some verbs to form the past tense.

hop

rob

smoke

robe

smock

hope

## short o

long o

3

**mope**

to act in a way that  
shows you're  
unhappy  
(verb)



What does **mope** have to do with getting in trouble?

***We saw the horses lope easily across the field.***

**Lope means \_\_\_\_\_.**

○ *to run*

○ **to smell**

5 Use 2 numbers in each group to make 12.

7 4 8

$$\textcircled{12} = \textcircled{\phantom{00}} + \textcircled{\phantom{00}}$$

6 5 6

**12** =  +

6 Circle true statements.  
Cross out ☒ false statements.

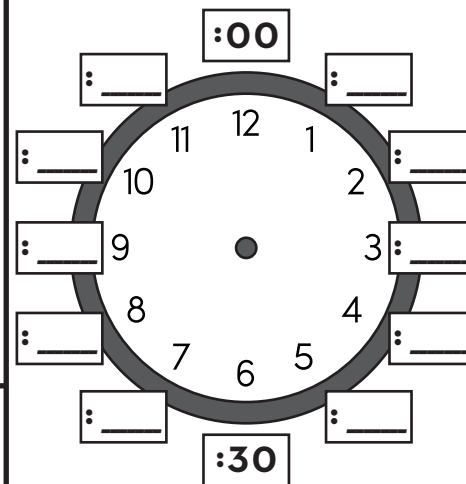
**24 can be expressed as:**

**2 one 4 tens**

**24 ones**

**2 tens 4 ones**

7 Fill in the missing 5 minutes.



**Draw the minute hand showing that 40 minutes have passed since the hour started.**

8 Dad bought a pack of 28 fireworks. Some of the fireworks were missing a fuse.

*We were only able to light 19 of the fireworks.*

***How many of the fireworks were missing a fuse?***



Name: \_\_\_\_\_



1 Fill in the blank with the past tense of the underlined verb.

Today, I drive to school. Yesterday, I \_\_\_\_\_ to school.

Today, I cut my hair. Last month, I \_\_\_\_\_ my hair.

2 Write the word that matches each picture.

rope

hope

slope

mope



3

She moped all day because...

**mope**

to act in a way that  
shows you're  
unhappy  
(verb)



4

**scope**

o p e

s c

5 Add.

$1 + \underline{\quad} = 10$

$9 + \underline{\quad} = 10$

$2 + \underline{\quad} = 10$

$8 + \underline{\quad} = 10$

$3 + \underline{\quad} = 10$

$7 + \underline{\quad} = 10$

What do you notice?

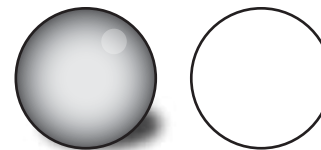
6 Write the numeral.

2 hundreds

1 one

6 tens

7 Compare the shapes



How are they alike?

How are they different?

8

Sebastián jump roped for 16 minutes. That's 6 more minutes than Thiago.

How many minutes did Thiago jump rope?



Name: \_\_\_\_\_



1 Rewrite the sentence correctly.

i hoppe you eated a good lunch

2 Circle & write the word that has the same vowel sound as the picture.



nod  
joke  
smell



Coke  
time  
off

3

**mope**

to act in a way that  
shows you're  
unhappy  
(verb)



What might make you **mope**?

4

**(out-)**

"bigger, better" or "away from"



She won when she  
**outran**  
all the other racers.

\_\_\_\_\_ + ran = outran  
prefix

5 Subtract.

$$5 - 2 = \underline{\quad}$$

$$45 - 2 = \underline{\quad}$$

$$50 - 20 = \underline{\quad}$$

$$500 - 200 = \underline{\quad}$$

6 Write **greater** or **less** to  
compare the numbers.

25 is \_\_\_\_\_ than 52


81 is \_\_\_\_\_ than 31

34 is \_\_\_\_\_ than 43

90 is \_\_\_\_\_ than 16


7 10 bows can fit on a kite's tail.  
**How many bows can fit on 10  
kites?**

8 Find the total.



= \_\_\_\_\_

James has 6 nickels.  
Amelia has 2 quarters and 2 pennies.  
**Who has more money?**





Name: \_\_\_\_\_



1 Write a sentence about something you said. Circle the verbs.

.....

.....

2 Write the past tense of the verbs by adding **-ed** or **-d** to the end.

Today I **hope**. Yesterday I \_\_\_\_\_.

Today I **visit**. Yesterday I \_\_\_\_\_.

Today I **race**. Yesterday I \_\_\_\_\_.

Add **-ed** to many verbs to form the past tense.

3 Draw a line to connect each word to the correct meaning.

pace

caress

chow

the speed at which  
something moves

to eat a lot of  
food quickly

a gentle or  
loving touch

4 learn

l \_ \_ \_ r n

l \_ \_ \_ n

\_ \_ \_ \_ \_

5 Solve.






$$70 - 20 = \bigcirc$$

$$54 - 3 = \bigcirc$$

$$5 - \bigcirc = 1$$

$$40 + 50 = \bigcirc$$

6 Write how many.



5 hundreds = \_\_\_\_\_

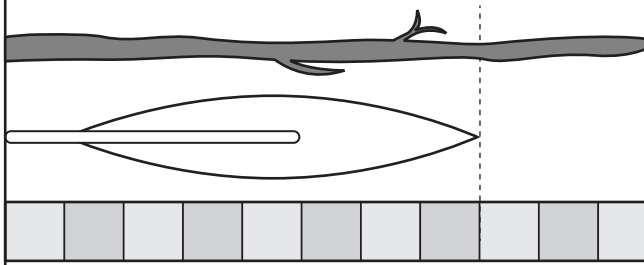
7 The ice cream shop sold 34 ice cream cones.  
14 of the cones were double scoops and the rest were single.

**How many ice cream cones were single scoop?**

8 Each  $\square$  stands for 1 unit.

The twig is about \_\_\_\_\_ units long.

The leaf is \_\_\_\_\_ units shorter than  
the twig.



Name: \_\_\_\_\_




1 What are three things you notice about the sentence below?


Caila's mail was stuffed with letters, boxes, and bills.



2 Circle the correct spelling for each picture.



snal      snale      snail




trail      trayl      tral

3

**frail**

weak or easily  
broken

(adjective)



The **frail** old ship fell  
apart in the sea.

What is the ship like?

4

**other**

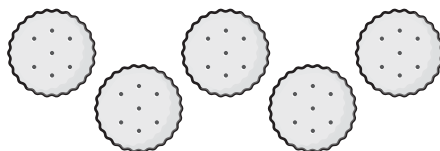
t h e

o      r

5

2 friends want to share 5  
crackers.

How many crackers does  
each friend get?



Each friend gets \_\_\_\_\_  
crackers.

6

**372**

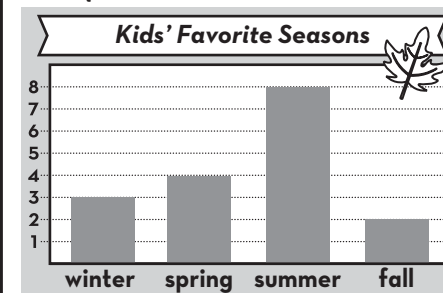
the digit  
3  
stands  
for  
3 hundreds  
or \_\_\_\_\_

the digit  
\_\_\_\_\_ stands  
for  
7 tens  
or 70

the digit  
2  
stands  
for  
\_\_\_\_\_ ones  
or 2

7

Use the graph to answer the  
questions.



Most kids like

\_\_\_\_\_ best.

The fewest kids

chose \_\_\_\_\_.

8

My sister mailed 30 wedding invitations, but she still has 25 more to mail.

How many invitations are there in all?



Name: \_\_\_\_\_



1 Circle the 3 plural nouns in each sentence.

Cailla's mail was stuffed with letters, boxes, and bills.

The buses need new tires and windows.

Add -s or -es to most nouns to make them plural.

2 Sort the words by their spelling pattern.

pail

pal

made

maid

pale

mad

**short a** CVC

**long a** CVCE

**long ai** CVVC

3

**frail**

weak or easily  
broken

(adjective)



What does **frail** have  
to do with getting old?

4 Write a synonym from the box  
for each bold word.

run

wise

send

**mail**

\_\_\_\_\_

**race**

\_\_\_\_\_

**smart**

\_\_\_\_\_

**Synonyms** are words that have  
about the same meaning.

5 Use 2 numbers in each group  
to make 13.

**9 4 2**

$$\textcircled{13} = \textcircled{\phantom{00}} + \textcircled{\phantom{00}}$$

**5 7 8**

$$\textcircled{13} = \textcircled{\phantom{00}} + \textcircled{\phantom{00}}$$

6 Circle true statements.  
Cross out ☒ false statements.


**89 can be expressed as:**

7 tens 19 ones


7 tens 9 ones

9 ones 8 tens

7 Count by 5 to tell how many  
**minutes** have passed.



\_\_\_\_\_ minutes have passed  
since the hour started.



\_\_\_\_\_ minutes have passed  
since the hour started.

8

There were 28 quail in the garden. 13 run and hide.  
**How many quail are still in the garden?**



Name: \_\_\_\_\_



1 Write plural nouns to complete each sentence.

We saw a lot of \_\_\_\_\_ at the zoo.

I want some \_\_\_\_\_ for my birthday.

2 Write the word that matches each picture.

mail

tail

pail

sail



3

**frail**

weak or easily broken

(adjective)



To send the **frail** vase in the mail, we first had to...

4

**circle**

c			c	l	e
---	--	--	---	---	---

c	i	r			
---	---	---	--	--	--

--	--	--	--	--	--

5

Fill in combinations of 10.

10
3

10 = 3 + \_\_\_\_\_

10 = \_\_\_\_\_ + 3

10
1

10 = 1 + \_\_\_\_\_

10 = \_\_\_\_\_ + 1

10
4

10 = \_\_\_\_\_ + 4

10 = 4 + \_\_\_\_\_

6

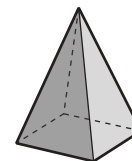
Write the numeral.

1 hundred  
5 tens  
0 ones

2 hundreds  
3 tens  
9 ones

7

Compare the shapes.



How are they alike?

How are they different?

8

Aiden read 46 pages in his shark book. He read 31 pages in his space book.

**How many more pages did he read in his shark book?**



Name: \_\_\_\_\_

# DAY

# 29



1 Rewrite the sentence correctly.    the snail~~s~~ leaved trails on the porch

---




---


2 Circle & write the word that has the same vowel sound as the picture.

	<div style="background-color: #d3d3d3; padding: 2px;">blast</div> <div style="background-color: #d3d3d3; padding: 2px;">bank</div> <div style="background-color: #d3d3d3; padding: 2px;">crawl</div>	
	<div style="background-color: #d3d3d3; padding: 2px;">ball</div> <div style="background-color: #d3d3d3; padding: 2px;">stain</div> <div style="background-color: #d3d3d3; padding: 2px;">hand</div>	


3

## frail



weak or easily broken  
(adjective)

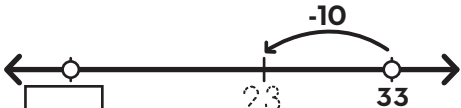


What are some things you shouldn't do if you're **frail**?

4 Add the prefix (out-) to each base word. Draw lines to match the words with their meaning.

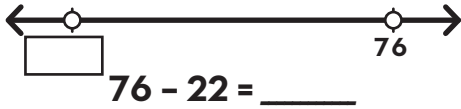
<div style="background-color: #d3d3d3; padding: 5px; display: inline-block;">_____grow</div> <div style="background-color: #d3d3d3; padding: 5px; display: inline-block;">_____do</div>	
<div style="display: flex; justify-content: space-around;"> <div style="width: 45%;">to do more than</div> <div style="width: 45%;">to grow bigger than</div> </div>	

5 Make jumps of tens and ones to subtract 22.



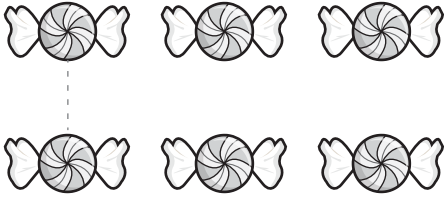
**33 - 22 = \_\_\_\_\_**

---




**76 - 22 = \_\_\_\_\_**

6 Draw lines to pair up pictures. Is it an even or odd amount?






**6 is an \_\_\_\_\_ number.**  
even or odd

7 My shirt has buttons down the front. Each button has 4 holes. In all, there are 20 holes. **How many buttons are on my shirt?**



8 Find the total.




= \_\_\_\_\_

Xyla has 53¢. She gets 2 more dimes. **How much money does she have now?**

Name: \_\_\_\_\_



1 Write a sentence about 2 foxes. Circle the plural nouns.

\_\_\_\_\_

\_\_\_\_\_

\_\_\_\_\_

2 Write the past tense of the verbs by changing the spelling.

Today I **take**. Yesterday I \_\_\_\_\_.

Today I **give**. Yesterday I \_\_\_\_\_.

Today I **find**. Yesterday I \_\_\_\_\_.

Change the spelling of some verbs to form the past tense.

3 Draw a line to connect each word to the correct meaning.

squall

mope

pace

to act in a way that  
shows you're unhappy

the speed at which  
something moves

a sudden, windy storm  
that brings rain or snow

4 mail

m			l
	a	i	

5 Solve.


$$65 - 13 = \bigcirc$$

$$3 + \bigcirc = 8$$

$$17 + 40 = \bigcirc$$


$$20 + 5 + 25 = \bigcirc$$

6 Write how many.



\_\_\_\_\_ hundreds = \_\_\_\_\_

7



There are \_\_\_\_\_ coins  
in a bank.

There are \_\_\_\_\_ banks  
in all.

8

Each kid wants to read 30 books over the summer.  
So far, Aliya has read 18. Tarek has read 4. Remao has read 11.  
**How many more books does each kid need to read?**



Aliya \_\_\_\_\_

Tarek \_\_\_\_\_

Remao \_\_\_\_\_

$$\bigcirc + \bigcirc + \bigcirc = \bigcirc$$

Name: \_\_\_\_\_



1 What are three things you notice about the sentence below?


Some angry geese chased the women past the flowers!



2 Circle the correct spelling for each picture.



reech reach reche



teeach teche teach

3

**peachy**

good or very nice

(adjective)

After the rain, the weather was just **peachy**.

What was the weather like?




4

**could**

c          l    d

c               

5 Circle shapes that show thirds.



**Thirds** are three equal parts of a whole.

6

**356**

\_\_\_\_\_ hundreds \_\_\_\_\_ tens \_\_\_\_\_ ones

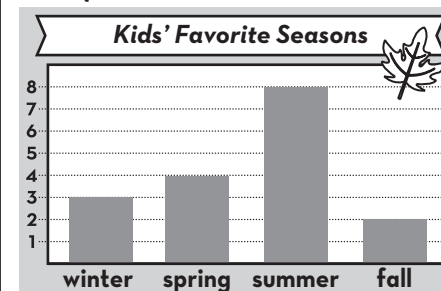
300 + \_\_\_\_\_ + \_\_\_\_\_

**201**

\_\_\_\_\_ hundreds \_\_\_\_\_ tens \_\_\_\_\_ one

\_\_\_\_\_ + \_\_\_\_\_ + \_\_\_\_\_

7 Use the graph to answer the questions.



\_\_\_\_\_ is the favorite season of 3 kids.

4 kids like

\_\_\_\_\_ best.

8

Jaiden picked 26 peaches. Then he picked 34 more.

**How many peaches did he pick in all?**



Name: \_\_\_\_\_



1 Circle the 3 plural nouns in each sentence.

Some angry geese chased the women past the flowers.

All the people laughed when the children told jokes.

Change the spelling of some nouns to make them plural.

2 Sort the words by their spelling pattern.

heel

beach

heat

bend

beep

help

**short e**

**long ee**

**long ea**

3

**peachy**

good or very nice  
(adjective)



What does **peachy** have to do with a picnic?

4 Use context clues to find the meaning of the underlined word.

The peal of the bells was so loud we had to cover our ears.

Peal means \_\_\_\_\_.

☐ cold wind

☐ sound of bells

5 Use 2 numbers in each group to make 14.

**5 7 7**

$$14 = \bigcirc + \bigcirc$$

**6 9 8**

$$14 = \bigcirc + \bigcirc$$

6 Write the number in different forms.


180 can be written as:

\_\_\_\_\_ hundred \_\_\_\_\_ tens


or \_\_\_\_\_ tens

or \_\_\_\_\_ ones


7 Tell the time.



The hour hand is in the \_\_\_\_\_ o'clock space.



\_\_\_\_\_ minutes have passed since the hour started.



The time is:

\_\_\_\_\_ : \_\_\_\_\_

8

There were 41 seals on the beach. 23 of them dive into the sea.

How many seals are still on the beach?





Name: \_\_\_\_\_



1 Write plural nouns to complete each sentence.

We saw one mouse in the kitchen and four \_\_\_\_\_ downstairs.

I have a blister on one foot, but both my \_\_\_\_\_ are sore.

2 Write the word that matches each picture.

reach

beach

peach

each



3

**peachy**

good or very nice  
(adjective)



Everything was **peachy** when we went...

4

**each**

e	a		
---	---	--	--

		c	h
--	--	---	---

--	--	--	--

5 Add.

$2 + \underline{\quad} = 10$

$2 + \underline{\quad} = 20$

$6 + \underline{\quad} = 10$

$6 + \underline{\quad} = 20$

$\underline{\quad} + 9 = 10$

$\underline{\quad} + 9 = 20$

What do you notice?


6 Write the numeral.

2 hundred  
3 tens  
4 ones

\_\_\_ hundreds  
\_\_\_ tens  
\_\_\_ ones

**586**

7 Circle all the quadrilaterals.  
Cross out ☒ shapes that are NOT quadrilaterals.




**Quadrilaterals** are any polygon (shape) that has 4 straight sides and 4 angles.

8

Queen size sheets cost \$45. King size sheets cost \$60.

**How much less do the queen sheets cost?**




Name: \_\_\_\_\_



1 Rewrite the sentence correctly.

do sheeps lose their tooths

2 Circle & write the word that has the same vowel sound as the picture.



bead  
seed  
desk



wheel  
bread  
great

3

**peachy**  
good or very nice  
(adjective)



What's something **peachy** you could say to someone having a bad day?

4

**(under-)**

"below" or "not enough"

**underwater**

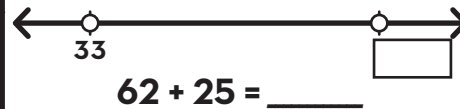
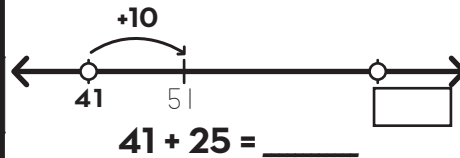
prefix

base word

definition

5

Make jumps of tens and ones to add 26.



6

Use symbols to compare the numbers.

89 ○ 89

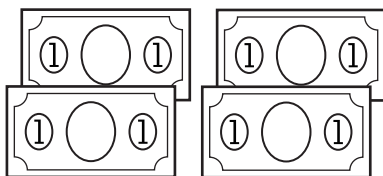
45 ○ 54

> is greater than    < is less than    = is equal to

7

Each wheel has 8 spokes.  
There are 4 wheels.  
**How many spokes are there?**

8 Find the total. Remember the \$!




= \_\_\_\_\_

Orika had 25¢.

She got 2 more quarters.

**How much money does she have now?**



Name: \_\_\_\_\_



1 Write a sentence about **children**. Circle the plural nouns.

.....

.....

2 Add -s or -es to each noun to make it plural.

scale \_\_\_\_\_ class \_\_\_\_\_ peach \_\_\_\_\_

dish \_\_\_\_\_ stain \_\_\_\_\_ tax \_\_\_\_\_

treat \_\_\_\_\_ beach \_\_\_\_\_ cake \_\_\_\_\_

Add -s or -es to most nouns to make them plural.

3 Draw a line to connect each word to the correct meaning.

frail

mope

whim

something you do for  
the fun of it

weak or easily broken

to act in a way that  
shows you're unhappy

4 sign

g n

s i

5 Solve.

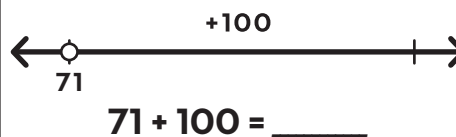
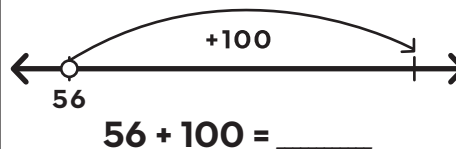
$$66 + 20 = \bigcirc$$

$$200 + 300 = \bigcirc$$

$$30 - \bigcirc = 10$$

$$400 + \bigcirc = 460$$

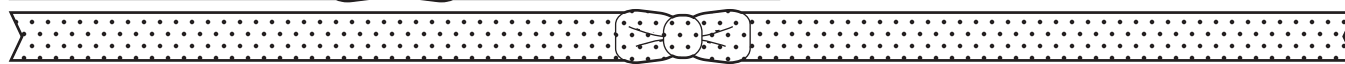
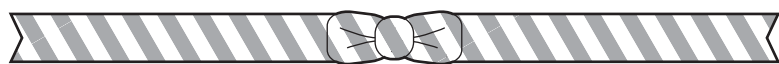
6 Draw arrows to add a hundred on the open number line.



7 Farmer Dwight has 42 crates of beets. So far he has loaded 29 crates into the delivery truck.

**How many more crates of beets need to be loaded in the truck?**

8 The striped bow is \_\_\_\_\_ inches long. The dot bow is \_\_\_\_\_ inches longer than the striped bow.



Name: \_\_\_\_\_



1 What are three things you notice about the sentence below?

I decorated the sandcastle with seashells and starfish by myself.



2 Circle the correct spelling for each picture.



cream    creem    creame



stem    steam    steme

3

**beam**

to smile happily

(verb)

The baby **beamed** when I rolled her the ball.

What is the baby doing?



4

**myself**

**s e l f**

**m y**

5

There are 6 horses.  
How many whole carrots are needed to give each horse half a carrot?



\_\_\_\_\_ whole carrots are needed for all the horses.

6

**712**

\_\_\_\_\_ hundreds \_\_\_\_\_ ten \_\_\_\_\_ ones

\_\_\_\_\_ + \_\_\_\_\_ + \_\_\_\_\_

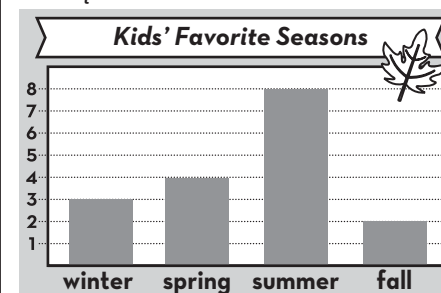
**690**

\_\_\_\_\_ hundreds \_\_\_\_\_ tens \_\_\_\_\_ ones

\_\_\_\_\_ + \_\_\_\_\_ + \_\_\_\_\_

7

Use the dot plot to answer the questions.



\_\_\_\_\_ **more** kids like summer than fall.

\_\_\_\_\_ **fewer** kid likes winter than likes spring.

8

Nana planted daisies, pansies, violets, zinnias, and marigolds. She planted 10 of each kind.  
How many flowers are in her garden?



5 daisies are picked. How many flowers are left?

Name: \_\_\_\_\_



1 Circle the 4 compound words in each sentence.

I decorated the sandcastle with seashells and starfish by myself.  
Someone left the scrapbook outside during a rainstorm.

Combining 2 or more small words makes a compound word.

2 Sort the words by their spelling pattern.

deal

bread

beam

deep

death

beet

**short ea**

**long ea**

**long ee**

3

**beam**

to smile happily  
(verb)



What does **beam** have to do with winning a game?

4 Finish the sentence with the strongest synonym.

**dream thought hope**

**Becoming an artist is my  
life's greatest**

\_\_\_\_\_!

**Synonyms** mean almost the same thing,  
but some have a stronger meaning.

5 Use 2 numbers in each group to make 15.

**8 7 6**

$$15 = \bigcirc + \bigcirc$$

**9 11 4**

$$15 = \bigcirc + \bigcirc$$

6 Write the number in different forms.


**360 can be written as:**

\_\_\_\_\_ hundreds \_\_\_\_\_ tens


or \_\_\_\_\_ tens

or \_\_\_\_\_ ones


7 Tell the time.



**The hour hand is  
in the \_\_\_\_\_  
o'clock space.**



\_\_\_\_\_ minutes  
**have passed since  
the hour started.**




**The time is:**

\_\_\_\_\_  
:

8

There are 53 people on the train. Some people get off at the station.  
There are still 27 people on the train.  
**How many people got off the train?**



Name: \_\_\_\_\_



1 Finish the sentence with a compound word made with the word **light**.

The \_\_\_\_\_ is bright!

Can you see the \_\_\_\_\_?


2 Write the word that matches each picture.

scream

dream

stream

cream



3

He **beamed** when he...

**beam**

to smile happily

(verb)



4

**dream**

   e   a   m

d   r   

5 Solve.

$$7 + 3 = \underline{\quad} \quad 17 + 7 = \underline{\quad}$$

How is adding  $7 + 3$  like  
adding  $17 + 3$ ?

6 Write the numeral.

7 hundreds  
0 tens  
2 ones

500 +  
90 +  
1

7 Draw 2 different  
quadrilaterals.

8

At the store, there are 48 yellow flip-flops and 64 green flip-flops.

**How many more green flip-flops are there?**



How can you tell your shapes are  
quadrilaterals?

Name: \_\_\_\_\_



1 Rewrite the sentence correctly.


\_\_\_\_\_ is the steam from jaide's teapot

2 Circle & write the word that has the same vowel sound as the picture.



quest  
breath  
least

\_\_\_\_\_



bean  
when  
great

\_\_\_\_\_

3

**beam**

to smile happily

(verb)



What might make you **beam**?

4

**(under-)**

"below" or "not enough"

This is the shirt I wear under my  
other shirt. It is my

5

Use the number line to solve  
the problems.



$$53 - 11 = \underline{\quad}$$



$$76 - 23 = \underline{\quad}$$

6

Draw lines to pair up pictures.  
Is it an even or odd amount?



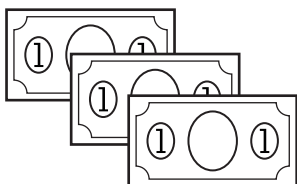
13 is an \_\_\_\_\_ number.  
even or odd

7

Each peapod has 5 peas.  
There are 30 peas in all.  
**How many peapods are  
there?**

8

Find the total.



= \_\_\_\_\_

Keagan had 3 dimes and 4 nickels  
He spent 25¢ on a bouncy ball.  
**How much money does he have now?**



Name: \_\_\_\_\_



1 Use the word **book** to form a compound word and use it in a sentence. Circle the compound words.

.....

.....

2 Draw lines to match each singular noun with its plural form.

man	louse	ox	fish
•	•	•	•
•	•	•	•
oxen	men	fish	lice

Change the spelling of some nouns to make them plural.

3 Draw a line to connect each word to the correct meaning.

peachy

frail

pace

the speed at which  
something moves

good or very nice

weak or easily broken

4 gave

	a		e
--	---	--	---

g		v	
---	--	---	--

--	--	--	--

5 Solve.

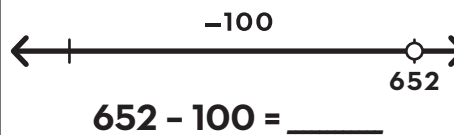
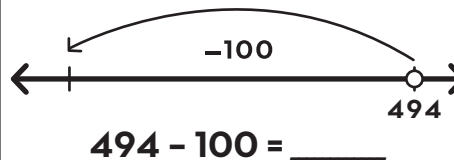
$$18 - \bigcirc = 4$$

$$\bigcirc + 100 = 190$$

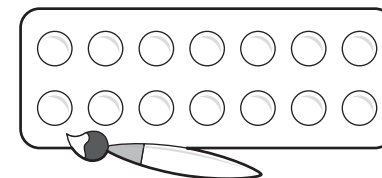
$$20 + 30 = \bigcirc$$

$$500 + 40 + 6 = \bigcirc$$

6 Draw arrows to subtract 100 on the open number line.



7 ROW →



There are \_\_\_\_\_ rows  
of paints.

There are \_\_\_\_\_ paints in  
each row.

There are \_\_\_\_\_ paints  
in all.

$$\bigcirc + \bigcirc = \bigcirc$$

8 The ice cream shop sold 30 scoops of vanilla ice cream.  
They sold twice as many scoops of chocolate ice cream.  
**How many scoops of ice cream did they sell in all?**





Name: \_\_\_\_\_



1 What are three things you notice about the sentence below?

The sneaky crook stole many coins and beautiful jewels.



2 Circle the correct spelling for each picture.



lok      look      lock



hok      hock      hook

3

**bookworm**

a person who likes books and reading

(noun)


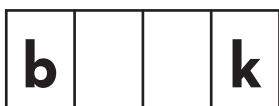


He's such a **bookworm** he takes a book everywhere he goes.


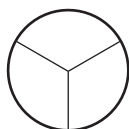

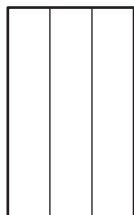
What does he like?

4

**book**



5 Shade a third of each shape.



**Thirds** are three equal parts of a whole.

6

**575**

\_\_\_\_\_ hundreds \_\_\_\_\_ tens \_\_\_\_\_ ones

\_\_\_\_\_ + \_\_\_\_\_ + \_\_\_\_\_

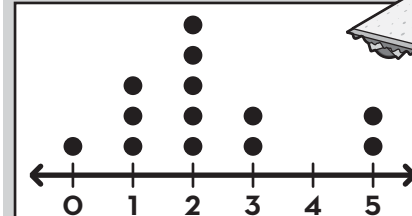
**910**

\_\_\_\_\_ hundred \_\_\_\_\_ ten \_\_\_\_\_ ones

\_\_\_\_\_ + \_\_\_\_\_ + \_\_\_\_\_

7 Use the dot plot to answer the questions.

**Sandwiches Eaten Last Week**



**Most kids ate a sandwich**

\_\_\_\_\_ times last week.

\_\_\_\_\_ kids ate 4 sandwiches last week.

8

Ester read from page 20 to page 60 in her book.  
Then she read from page 70 to page 85.  
**How many pages did she read in all?**



Name: \_\_\_\_\_



1 Circle the 3 adjectives in each sentence.

The sneaky crook stole many coins and beautiful jewels.

The black rooks loudly caw from the tall branches.

Adjectives describe nouns.

2 Sort the words by their spelling pattern.

shook

broom

brook

shoot

short -oo foot

long -oo food

3

bookworm

a person who likes books and reading

(noun)



What does **bookworm** have to do with a library?

4 Use context clues to find the meaning of the underlined word.

I'm so tired I can't keep my eyes open!  
I need a quick snooze.

Snooze means \_\_\_\_\_.

☐ a loud sneeze

☐ a short nap

5 Use 2 numbers in each group to make 16.

9 7 5

$$16 = \bigcirc + \bigcirc$$

6 5 11

$$16 = \bigcirc + \bigcirc$$

6 Circle true statements.  
Cross out ☒ false statements.


394 can be expressed as:

394 ones

3 hundreds 94 tens 4 ones


39 tens 4 ones

7 Tell the time.




The time is:

:



The time is:

:



The time is:

:

8

There were 84 rooks in the trees.  
36 rooks fly away.

How many rooks are still in the trees?



Name: \_\_\_\_\_



1 Add adjectives to complete each sentence. Circle the noun each adjective describes.

This \_\_\_\_\_ book is full of \_\_\_\_\_ stories.

I cooked \_\_\_\_\_ eggs and \_\_\_\_\_ hashbrowns.



2 Write the word that matches each picture.

took

shook

cook

book



3

**bookworm**

a person who likes books and reading

(noun)



I knew she was a **bookworm** because...

4

**easy**

e a

s y

5 Circle the 2 numbers that make 10. Then find the total.

$$\textcircled{1} + \textcircled{7} + 9 = \underline{\quad}$$
$$10 + 7$$

$$5 + 5 + 8 = \underline{\quad}$$

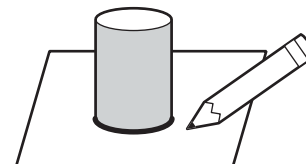
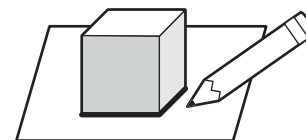
6 Write the numeral.

\_\_\_ hundreds  
\_\_\_ tens  
\_\_\_ ones

**943**

75 tens  
8 ones

7 Circle the shape you can make by tracing each solid shape.



8

The diner cooked 46 regular pancakes and 39 blueberry pancakes.

**How many pancakes were cooked in all?**



Name: \_\_\_\_\_



1 Rewrite the sentence correctly.

are Kates tools goode for wood

2 Circle & write the word that has the same vowel sound as the picture.



rope  
flock  
wood



cloth  
broke  
shook

3

**bookworm**

a person who likes  
books and reading

(noun)



What would make a good gift for  
a **bookworm**?

4

**(-ish)**

"sort of" or "nearly"

**childish**

base word

suffix

definition

5

Subtract.

$$60 - 10 - 2 = \underline{\quad}$$

$$60 - 12 = \underline{\quad}$$

$$48 - 20 - 5 = \underline{\quad}$$

$$48 - 25 = \underline{\quad}$$

6

Use >, < or = to compare the  
numbers

$$546 \bigcirc 56$$

$$693 \bigcirc 936$$

$$474 \bigcirc 474$$


7

There are 5 sheep on the farm.  
Each sheep produced 20 of  
wool this year.

**How many pounds of wool  
were produced in all?**

8

Find the total.



= \_\_\_\_\_

I have 46¢.

Yann has 91¢.

**How much more money does Yann have?**



Name: \_\_\_\_\_



1 Write a sentence describing your favorite shirt. Circle the adjectives.

2 Write the two words that make up each compound word.

bookmark = \_\_\_\_\_ + \_\_\_\_\_

fishhook = \_\_\_\_\_ + \_\_\_\_\_

overlook = \_\_\_\_\_ + \_\_\_\_\_

Combining 2 or more small words makes a compound word.

3 Draw a line to connect each word to the correct meaning.

beam

peachy

caress

to smile happily

a gentle or  
loving touch

good or very nice

4 those

	h		s	e
--	---	--	---	---

t	h			
---	---	--	--	--

--	--	--	--	--

5 Solve.

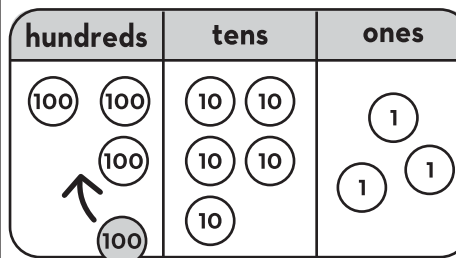
$$63 - 20 = \bigcirc$$

$$8 + \bigcirc = 14$$

$$200 + 92 = \bigcirc$$

$$600 - 300 = \bigcirc$$

6 Write the number shown on the chart.



100 more than 353 is \_\_\_\_\_.

7 10 books fit on a shelf.  
There are 10 shelves in each  
bookcase.

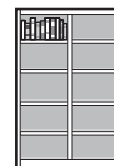
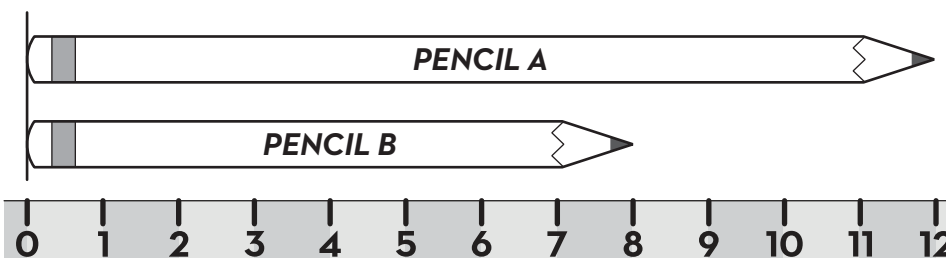
**How many shelves are  
needed for 149 books?**

**How many bookcases are  
needed for all the shelves?**

8 Measure the ribbons.

PENCIL A is \_\_\_\_\_  
centimeters long.

PENCIL B is \_\_\_\_\_  
centimeters long.



Name: \_\_\_\_\_



1 What are three things you notice about the sentence below?

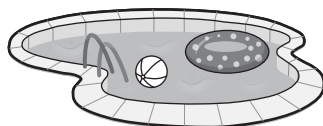
It's cool in here, but it isn't so cold that I'm uncomfortable.



2 Circle the correct spelling for each picture.



drewl      drool      drull



pool      pole      pull

3

**foolery**

foolish or silly  
behavior

(noun)



The **foolery** in the movie  
made the kids all laugh.

What made the kids laugh?

4

**eight**

g h t

e i

5 Label each partitioned shape  
**halves, thirds, or quarters.**



\_\_\_\_\_



\_\_\_\_\_



\_\_\_\_\_

6 Circle numbers that have a  
7 in the tens place.

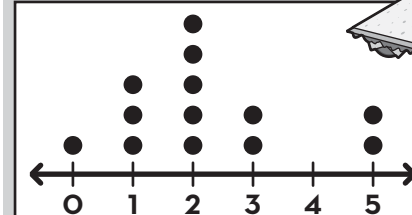
171      687      372

70      744

27      976      587

7 Use the dot plot to answer the  
questions.

**Sandwiches Eaten Last Week**



1 sandwich was eaten by  
\_\_\_\_\_ kids last week.

\_\_\_\_\_ kids ate 5  
sandwiches last week.

8

The pirate crew has sailed 118 days. They still have a many days until they reach the island.  
In all, they need to sail for 206 days.

**How many more days do they need to sail?**



Name: \_\_\_\_\_



1 Circle the contractions in each sentence.

It's cool in here, but it isn't so cold that I'm uncomfortable.  
You're a great cook and you've made the best meal I've ever had!

A contraction combines 2 words with an apostrophe to replace the missing letters.

2 Sort the words by their spelling pattern.

blew

blue

grew

bloom

goop

glue

oo - cool

ew - crew

ue - clue

3

**foolery**

foolish or silly  
behavior

(noun)



What does **foolery** have to do with  
April Fools Day?

4 Finish the sentence with the  
strongest synonym.

flew

went

swooped

The bird \_\_\_\_\_  
across the sky.

**Synonyms** mean almost the same thing,  
but some have a stronger meaning.

5 Use 2 numbers in each group  
to make 17.

8

7

9

$$17 = \bigcirc + \bigcirc$$

7

6

10

$$17 = \bigcirc + \bigcirc$$

6 Circle true statements.

Cross out ☒ false statements.


**607 can be expressed as:**

60 tens 7 ones

607 ones


60 ones 7 tens

7 Tell the time.




The time is:

:



The time is:

:



The time is:

:

8



295 kids were swimming in the pool.  
51 kids went home.  
**How many kids are still in the pool?**

Name: \_\_\_\_\_



1 Complete each sentence using a contraction with not.

**CONTRACTIONS**

didn't      couldn't  
wouldn't      won't  
can't      shouldn't

They \_\_\_\_\_ go swimming.

We \_\_\_\_\_ play here.

2 Write the word that matches each picture.

pool

cool

stool

tool



3

**foolery**

foolish or silly  
behavior

(noun)



It was **foolery** to...

4

**warm**

a r

w

5 Make the problems easier by making 10 or using doubles.

$$3 + 7 + 7 = \underline{\quad}$$

$$6 + 4 + 6 + 4 = \underline{\quad}$$

6 Write the numeral.

2 tens  
0 hundreds  
8 ones

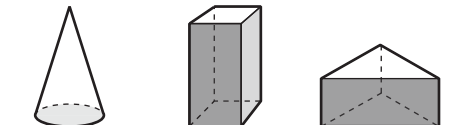
600 +  
4 +  
70

7 Circle the solid shape with the correct face.

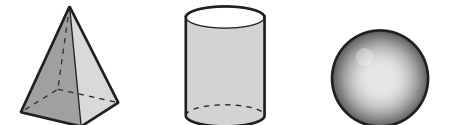
Which shape has a circle face?



Which shape has a triangle face?

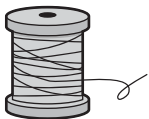


Which shape has a square face?



8

The craft store has 363 spools of thread. 120 spools are white.  
The rest of the spools are different colors.  
**How many spools are colorful?**





Name: \_\_\_\_\_



1 Rewrite the sentence correctly.

we cant swim until the poole is cleand

2 Circle & write the word that has the same vowel sound as the picture.



flute  
hole  
book



goat  
room  
duck

3

**foolery**

foolish or silly  
behavior

(noun)



Should there be any **foolery** at school?

4

**(-ish)**

"sort of" or "nearly"

The grass is sort of brown.  
It is \_\_\_\_\_.

5 Add.

$$39 + 10 + 4 = \underline{\hspace{2cm}}$$

$$39 + 14 = \underline{\hspace{2cm}}$$

$$66 + 20 + 8 = \underline{\hspace{2cm}}$$

$$66 + 28 = \underline{\hspace{2cm}}$$

6 Draw lines to pair up pictures.  
Is it an even or odd amount?




17 is an \_\_\_\_\_ number.  
even or odd

7 Each stool has 3 legs.  
**How many stools are there if  
there are 24 legs?**

8 Find the total.



Olivia wants a game that costs \$1.50.  
She has 5 quarters.  
**Does she have enough to buy the game?**



Name: \_\_\_\_\_



1 Write about something a fish can't do. Circle the contraction.

.....

.....

.....

2 Choose an adjective from the box to describe each noun.

cold many metal gray heavy shiny

\_\_\_\_\_ tools \_\_\_\_\_ hippos

\_\_\_\_\_ rocks \_\_\_\_\_ spoons

Adjectives describe nouns.

3 Draw a line to connect each word to the correct meaning.

dandy

beam

bookworm

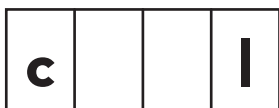
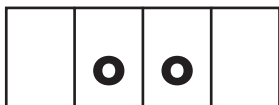
to smile happily

very good

a person who likes books and reading

4

cool



5 Solve.

$$30 - 4 = \bigcirc$$

$$800 + \bigcirc = 872$$

$$72 - 12 = \bigcirc$$

$$8 + 8 + 2 = \bigcirc$$


6 Write the number shown on the chart.

hundreds	tens	ones
100 100	10 10	1 1
100 100	10 10	
100 100	10 10	

300 less than 762 is \_\_\_\_\_.

7

ROW →



There are \_\_\_\_\_ rows of chocolates.

There are \_\_\_\_\_ chocolates in each row.

There are \_\_\_\_\_ chocolates in all.

$$\bigcirc + \bigcirc + \bigcirc = \bigcirc$$


8

Adohi is building toy trains. Each train needs 10 screws. 10 finished trains fit in a box.

Adohi has 328 screws.

How many trains can he make?

How many boxes would he need for all the finished trains?





## >> Terms of Use <<

The original purchaser of this document is hereby granted permission to reproduce this document specifically for teaching purposes in a single classroom. If you are NOT the original purchaser, please download the item from my store on Teachers Pay Teachers before making any copies. Redistributing, editing, selling, or posting this item or any part thereof on the Internet is strictly prohibited without first gaining permission from the author. Violations are subject to the penalties of the Digital Millennium Copyright Act.

Please contact us if you wish to be granted special permission or if you have a question about the usage of this product.

## >> Which Means? <<

You **CANNOT** copy this resource for others...  
but you **CAN** tell them all about it!

You **CANNOT** put a copy of this resource online...  
but you **CAN** link to the item in our store!

You **CANNOT** change or sell this resource...because, well, c'mon! It took a long time and a lot of effort for us to make it!

# THANK YOU FOR YOUR DOWNLOAD!



SHOP

Hello there! We are a set of sisters who are the brains behind the 'Second Story Window' brand. We are both former 2nd grade teachers and current preschool teachers with a combined 17 years experience in the classroom. We love to make life just a little easier for teachers by designing curriculum that is both rigorous and easy-to-use!

*Emily & Heidi*

TRANSFORM YOUR

## Word Work INTO Word Play

- A COMPREHENSIVE PHONICS CURRICULUM -

*Ready to take your word work  
to the next level?*

CLICK THE BUTTON BELOW TO TRY OUT OUR  
PHONICS CURRICULUM... COMPLETELY FREE!

**I WANT WORD PLAY!**

